
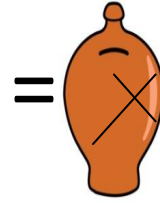
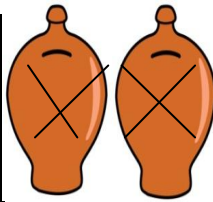


ECUACIONES TIPO 5

	$2X+6$	$= X+8$



X=

	$3X+1$	$= X+5$

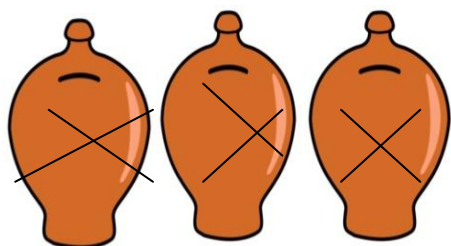
X=

	$4X+3$	$2X+9$

X=

	$5X+2$	$= 2X+17$

X=



+

